

























Cal é o valor de cada símbolo?

¿Cuál es el valor de cada símbolo?

				10
				5
				8
				13
				16
				12
16	17	14	17	