

Representing Numbers Match Up

Directions: Write the letter matching the phrase on the line.

1. Standard form

2. Word form

3. Expanded form

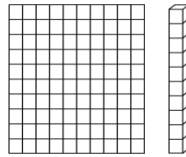
4. Base 10 Model

5. Number Sentence

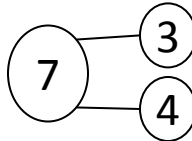
6. Number Bond

a. $8 + 12 = 20$

b.



c.



d. Eighty-two

e. $700 + 30 + 2$

f. 54

Draw your favorite way to represent a number in the space below using any number you choose!

Representing Numbers Match Up

Directions: Write the letter matching the phrase on the line.

1. Standard form

2. Word form

3. Expanded form

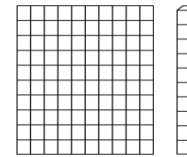
4. Base 10 Model

5. Number Sentence

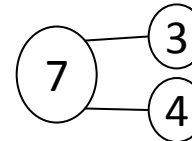
6. Number Bond

a. $8 + 12 = 20$

b.



c.



d. Eighty-two

e. $700 + 30 + 2$

f. 54

Draw your favorite way to represent a number in the space below using any number you choose!