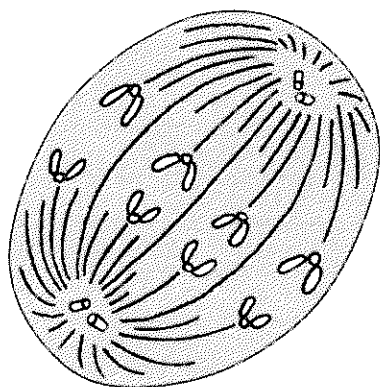
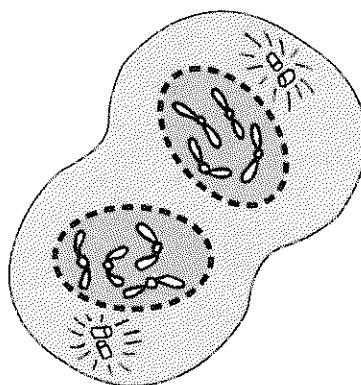


Chapter 10, Cell Growth and Division (continued)

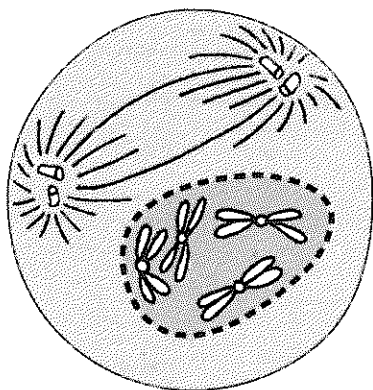
21. Identify each of the four phases of mitosis pictured below.



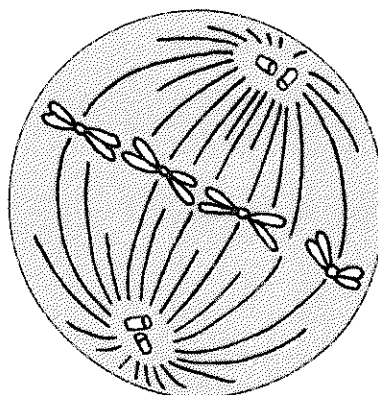
a. _____



c. _____



b. _____



d. _____

Cytokinesis (page 248)

22. What is cytokinesis? _____

23. How does cytokinesis occur in most animal cells? _____

24. Circle the letter of what forms midway between the divided nucleus during cytokinesis in plant cells.

a. cell nucleus

c. cell plate

b. cytoplasm

d. cytoplasmic organelles

Reading Skill Practice

You may sometimes forget the meanings of the vocabulary terms that were introduced earlier in the textbook. When this happens, you can check the meanings of the terms in the Glossary, which you can find at the end of the book just before the Index. Use the Glossary to review the meanings of all the vocabulary terms listed on page 244. Write their definitions on a separate sheet of paper.