



Federal Board HSSC-I Examination Chemistry Model Question Paper (Curriculum 2006)

MCQ'S KEY

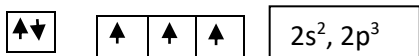
i B	ii A	iii C	iv B	v C	vi C	vii C	viii C	ix C	x B
xi B	xii C	xiii C	xiv C	xv C	xvii B	xvii C			

Q. No. 2(i): The bond angles of H₂O and NH₃ are not 109.5° like that of CH₄. Although O and N atoms are SP³ hybridized like C. Give reason.

Ans: Bond angle in NH₃ is 107.5°. This is due to lone pair, bond pair repulsion is greater than bond pair, bond pair repulsion. So bond angle is reduced to 107.5° although there is sp³ hybridization in N. Bond angle in H₂O is 104.5°. This is due to lone pair, lone pair repulsion is greater than lone pair, bond pair repulsion. So bond angle is reduced to 104.5° although there is sp³ hybridization in oxygen. CH₄ has no lone pair. So bond angle is 109.5° and C is sp³ hybridized.

Q. No. 2(ii) As both NF₃ and BF₃ are tetra atomic molecules but have different shape and geometry. Explain according to VSEPR theory.

Ans: NF₃, N 1s², Valence Shell



2s 2px 2py 2pz

Total electron pair	Lone pair	Bond pair
---------------------	-----------	-----------

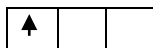
4	1	3
---	---	---

Shape of NF₃ is trigonal pyramidal with angle 107.5°. This is due to one lone pair and three bond pair while in BF₃

5B 1S², 2s², 2p¹ Valence Shell

Ground state





2s 2px 2py 2pz

Excited state



Total electron pair Lone pair Bond pair

3 0 3

Shape is trigonal due to three bond pair and no lone pair. Bond angle is 120°.

Q. No. 2(iii) Ionic Crystals are brittle in nature but metals are malleable in nature. Give reason of your answer.

Ans: It is because ionic solid consist of parallel layers in which cations and anions are present in alternate positions. Thus, when a stress is applied on crystal one layer of ions slides a little bit over the other layer. In this way like ions come in front of each other, which repel each other and thus a crystal is broken and show brittleness. When stress is applied on metal then layer slip over each other and their shape is changed. Hence they can be changed into sheets malleable or were ductile without breaking.

Q. No. 2(iv) Derive the units for general gas constant 'R' in general gas equation.

- When the pressure is in Nm^{-2} and volume in m^3 .
- When energy is expressed in ergs.

Ans: $PV = nRT$

$$\frac{PV}{nT} = R$$

$$R = \frac{1.01 \times 10^5 \text{ N/m}^2 \times 0.022414 \text{ m}^3}{1 \text{ mole} \times 273 \text{ K}}$$

$$R = 8.314 \text{ Nm mol}^{-1} \text{ K}^{-1}$$

$$R = 8.314 \text{ J mole}^{-1} \text{ K}^{-1}$$

$$1 \text{ J} = 10^7 \text{ erg}$$

$$8.314 \text{ J} = 8.314 \times 10^7 \text{ erg mol}^{-1} \text{ K}^{-1}$$

$$R = 8.314 \times 10^7 \text{ erg mol}^{-1}\text{k}^{-1}$$

Q. No. 2(v) Justify that the distance gaps between different orbits of an atom go on increasing from the lower to the higher orbits

Ans: For H

$$Z=1$$

If $n=1 \Rightarrow$ K shell

$$r_1 = 0.529 \text{ \AA} \times n^2$$

$$r_1 = 0.529 \text{ \AA}$$

If $n=2 \Rightarrow$ L shell

$$r_2 = 0.529 \text{ \AA} (2)^2 = 0.529 \times 4$$

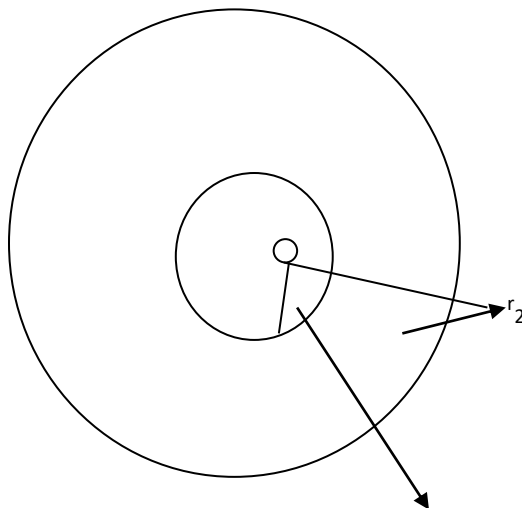
$$r_2 = 2.116 \text{ \AA}$$

If $n=3 \Rightarrow$ M shell

$$r_3 = 0.529 (3)^2$$

$$r_3 = 0.529 \times 9$$

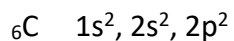
$$r_3 = 4.761 \text{ \AA}$$



This shows that as n is increased gap between the orbits is also increased.

Q. No. 2(vi) Describe hybridization in acetylene (C_2H_2) molecule. Also draw diagram of hybridized orbitals in this molecule.

Ans: C_2H_2



Ground State

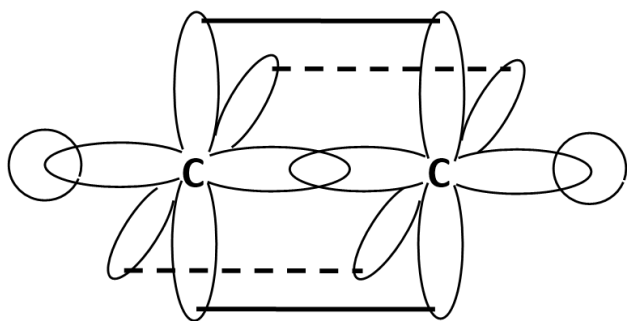


Excited State



2ps 2px 2py 2pz non hybridization orbital's

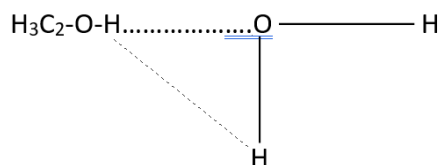
Sp hybridization



These are four hybrid orbital's. One δ bond is formed due to sp-sp end to end overlap. Two δ bonds are formed due to sp-1s end to end overlap. One π bond is formed due to 2py-2py lateral overlap. One π bond is formed due to 2pz-2pz lateral overlap.

Q. No. 2(vii) Interpret why water and ethanol can mix easily in all proportions.

Ans: Water and ethanol are mixed in all proportion. This is due to the hydrogen bonding this between water and ethanol. Oxygen attains partial negative charge ($-\delta$) and hydrogen attain partial positive charge ($+\delta$). Hence H-bonding is formed in between ethanol and water. Secondly both exist in liquid state



Q. No. 2(viii) Justify that Bohr's equation for the wave number can explain the spectral lines of Lyman, Balmer and Paschen series.

Ans: From Bohr's wave number equation

$$\bar{\nu} = 1.0967 \times 10^7 \text{m}^{-1} \left[\frac{1}{n_1^2} - \frac{1}{n_2^2} \right]$$

For Lyman's series $n_1 = 1$

$$\bar{\nu} = 1.0967 \times 10^7 \text{m}^{-1} \left[\frac{1}{1^2} - \frac{1}{n_2^2} \right]$$

Where $n_2 = 2, 3, 4, \dots$

For Balmer's series

$$\bar{\nu} = 1.0967 \times 10^7 \text{m}^{-1} \left[\frac{1}{2^2} - \frac{1}{n_2^2} \right]$$

Where $n_2 = 3, 4, 5, \dots$

For Paschalis Series

$$\bar{\nu} = 1.0967 \times 10^7 \text{m}^{-1} \left[\frac{1}{3^2} - \frac{1}{n_2^2} \right]$$

Where $n_2 = 4, 5, 6, \dots$

Hence Bohr's equations justify the Lyman's, Balmer's and Paschen's series.

Q. No. 2(ix) State Dalton's law. Also write its two applications.

Ans: Sum of the partial pressure of the non-reacting gases is equal to the total pressure of the gases

$$P_t = P_1 + P_2 + P_3 + \dots$$

Where P_1, P_2 and P_3 are the partial pressure of the gases and p_t is the total pressure of the gases.

Applications:

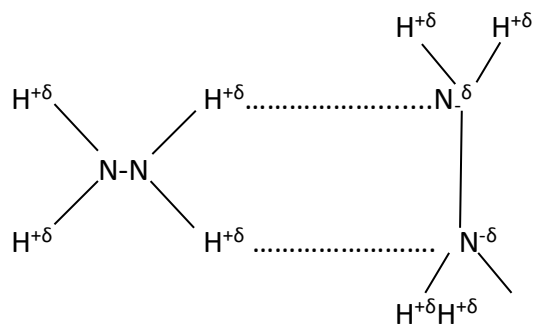
1. When gas is collected over vapors of water then

$$P_{\text{gas}} = P_{\text{total}} - P_{\text{H}_2\text{O}}$$

Where $P_{\text{H}_2\text{O}}$ is called aqueous tension. The respiration in living things depends upon the difference in partial pressure. Partial pressure of O_2 outside is 159g/cm^2 than in lungs, where the pressure is 116g/cm^2 at higher altitudes becomes 150g/cm^2 so pilot may have uncomfortable breathing.

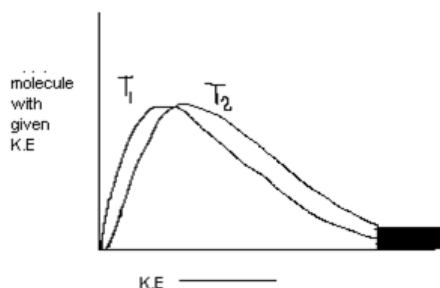
Q. No. 2(x) The melting and boiling points of hydrazine (N_2H_4) are much higher than those of ethane (C_2H_6). Suggest reasons for these differences in terms of the intermolecular forces each compound possesses.

Ans: N_2H_4 has lone pair and H-bonding. So M.P and B.P of N_2H_4 is much greater while in ethane C_2H_6 there is weak London dispersion force. So B.P is very low. B.P of C_2H_6 is -88.6°C



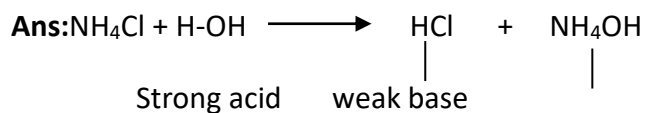
H-bonding

Q. No. 2(xi) Consider this graph and explain on the basis of Maxwell Boltzmann curve of kinetic energy why does rate of reaction increase with the increase in temperature.

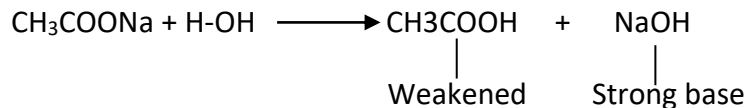


Ans: Effective collisions bring about the reaction. For a collision to be effective molecules must possess the activation energy and must be properly oriented. At ordinary temperature very few molecules possess this energy of activation. All the molecules of a reactant do not possess the same energy at a particular temperature. Most of them possess average energy. A fraction of molecules has kinetic energy more than the average energy. The number of molecules having at least kinetic energy equal to E_a at temperature T is proportional to the shaded area under the Maxwell Boltzmann curve of kinetic energy. As the temp is increased the area of the shaded region increases and more molecules have kinetic energy greater than E_a . An increase in temp increases the number of reactant molecules that have enough energy for effective collision.

Q. No. 2(xii) An aqueous solution of ammonium Chloride is acidic and that of sodium acetate is basic in nature. Give reason with the help of equations.



On hydrolysis of NH_4Cl , strong acid HCl is produced. Hence ammonium chloride aqueous solution is acid $\text{pH} < 7$



On hydrolysis of CH_3COONa , strong base NaOH is produced. Hence sodium acetate aqueous solution is basic in nature $\text{PH} > 7$

Q. No. 2(xiii) Calculate molarity of aqueous solution of sulfuric acid from the following data.

Molar mass	Molarity	Density in g/cm^3
98	18	1.84

Ans: Molarity = $18 \text{ mol}/\text{dm}^3 = 18 \text{ mol}/1000\text{cm}^3$

Density = 1.84 cm^{-3}

$$d = \frac{m}{v}$$

$$m = d \times v$$

$$m = 1.84 \times 1000$$

$$m = 1840 \text{ g H}_2\text{SO}_4$$

Mass of $\text{H}_2\text{SO}_4 = \text{Mole} \times \text{Molar mass}$

$$\text{Mass of H}_2\text{SO}_4 = 18 \times 98 = 1764 \text{ g H}_2\text{SO}_4$$

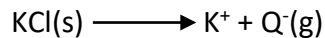
$$\text{Mass of water} = 1840 - 1764 = 76 \text{ g H}_2\text{O}$$

$\text{Molarity} = \frac{\text{Mole} \times 1000}{\text{Mass of H}_2\text{O}}$ $\text{Molarity} = \frac{18 \times 1000}{76}$ $\text{Molarity} = 236.84\text{m}$

Q. No. 2(xiv) Lattice energies of LiCl and KCl are $833 \text{ kJ}/\text{mol}$ and $690 \text{ kJ}/\text{mol}$, respectively. Discuss why is lattice energy of LiCl greater than KCl ?

Ans: Size of Li^+ is smaller than size of K^+ hence force of attraction between Li^+ and Cl^{-1} is much greater as compare to force of attraction between K^+ and Cl^{-1} . These force lattice energy of LiCl is $833 \text{ kJ}/\text{mol}$ while that of KCl is $690 \text{ kJ}/\text{mol}$





Size of $\text{Li}^+ <$ size of K^+

Q. No. 2(xv) Benzene (C_6H_6) is an aromatic hydrocarbon which exists as a liquid at room temperature.

Using the following standard enthalpy changes:

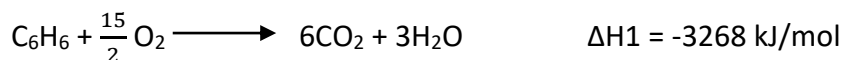
Heat of formation of $\text{CO}_2 = -393 \text{ KJ / mol}$

Heat of formation of $\text{H}_2\text{O} = -286 \text{ KJ / mol}$

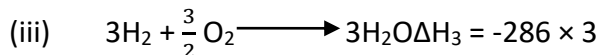
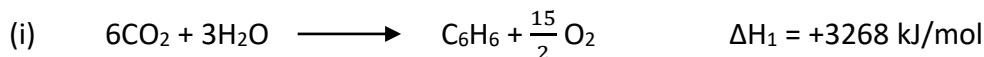
Heat of combustion of $\text{C}_6\text{H}_6 = -3268 \text{ KJ / mol}$

Calculate the enthalpy change of formation of C_6H_6 .

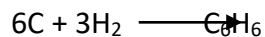
Ans:



For formation reverse the equation



Adding above equation



From Hess's Law

$$\Delta H_f = \Delta H_1 + \Delta H_2 + \Delta H_3$$

$$\Delta H_f = +3268 - 2358 - 858$$

$$\Delta H_f = 52 \text{ kJ/mol}$$

Q. No. 2(xvi) Consider the Standard electrode potentials

$$\text{Ag}^+ / \text{Ag} = 0.7994\text{V}, \quad \text{Fe}^{3+} / \text{Fe} = 0.771\text{V}$$


Write the half-cell reactions at each electrode. Also write overall reaction

Ans: $E_{\text{cell}} = E_{\text{cathode}} - E_{\text{anode}}$


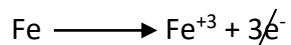
$$E_{\text{cell}} = 0.7994 - 0.771$$

$$E_{\text{cell}} = +0.02\text{V}$$

At cathode Reduction

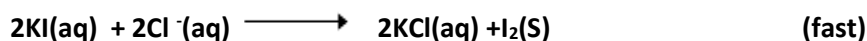
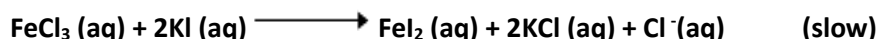


At Anode Oxidation



Overall reaction

Q. No. 2(xvii) Chemical kinetics is concerned with rates of chemical reactions and factors that affects the rates of chemical reactions. Consider the following steps of reactions:



a. Write the rate expression for the above reaction.

b. Give the order of reaction for the above reaction.

Ans:

a. Rate Law expression

$$\text{Rate} = k [\text{FeCl}_3][\text{KI}]^2$$

b. Order of reaction = 1 + 2

Order of reaction = 3rd order reaction

Q. No. 2(xviii) What is reverse osmosis? Give its daily life applications.

Ans: If a solution in contact with pure solvent across a semi permeable membrane is subjected to an external pressure equal to osmotic pressure, it stops osmosis. If external pressure is greater than solutions osmotic pressure, it will force solvent to flow from solution to solvent. This process is called reverse osmosis.

Daily life application of reverse osmosis:

Sea water is highly hypertonic to body fluids and this is not drinkable. By reverse osmosis it is subjected to desalination i.e remove large amounts dissolve salts from sea water. The sea water is pumped under high pressure 20 atm through the semi permeable membrane, which allow water molecules to pass and stop ions.

Q. No. 2(xix) How to calculate the molecular mass of the solute by using $\Delta P/P^0 = X_2$?

Ans: From Rault's Law

$$\frac{\Delta P}{P^0} = X_2 \quad \longrightarrow \text{Eq (1)}$$

$$\text{Since } X_2 = \frac{n_2}{n_1 + n_2}$$

Where n_2 is the mole of solute. Neglect the n_2 from denominator for dilute solution.

$$X_2 = \frac{n_2}{n_1}$$

$$n_1 = \frac{W_1}{M_1}$$

$$n_2 = \frac{W_2}{M_2}$$

Put in above equation

$$X_2 = \frac{W_2}{M_2} \times \frac{M_1}{W_1}$$

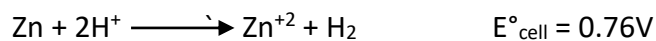

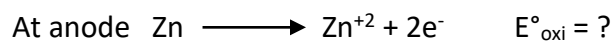
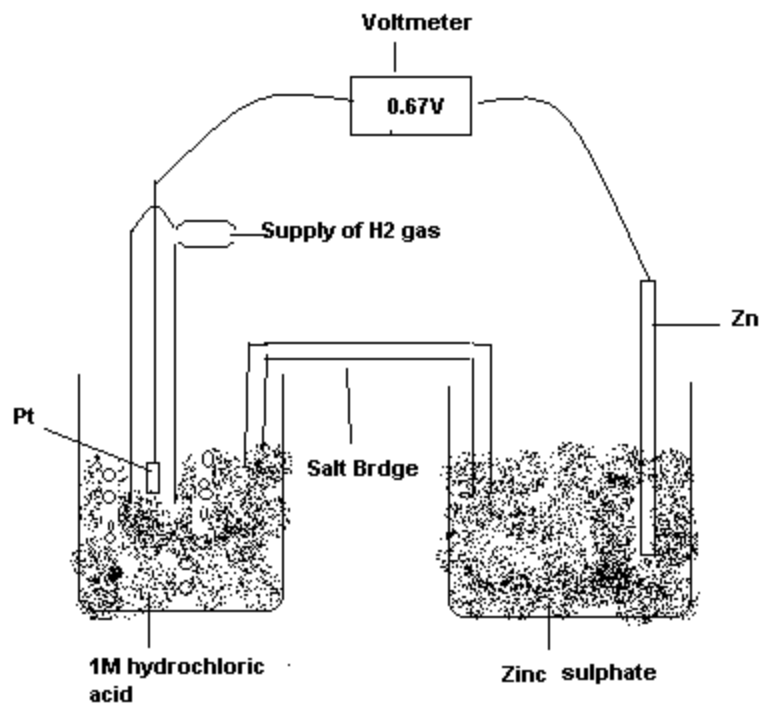
Put in eq 1

$$\frac{\Delta P}{P^0} = \frac{W_2 \times M_1}{M_2 \times W_1}$$

$$M_2 = \frac{P^0}{\Delta P} \times \frac{W_2 M_1}{W_1}$$

Q. No. 2(xx) How to calculate standard electrode potential? Explain briefly.

Ans: Standard hydrogen electrode is used to know the electrode potential. It is made up of platinum wire, which is sealed in glass tube. It is dipped in 1M HCl solution. H_2 gas is introduced from the top. Oxidation as well as reduction potential of hydrogen is zero. So voltmeter shows the electrode potential of the required element.



$E^\circ_{\text{cell}} = E^\circ_{\text{oxi}} + E^\circ_{\text{Red}}$ from voltmeter

$0.76\text{V} = E^\circ_{\text{oxi}} + 0.00$

$E^\circ_{\text{oxi}} = 0.76\text{V}$

Q. No. 3 (a) Derive the equation for the radius of nth orbit of hydrogen atom using Bohr's model.

Ans: Electrons revolve around the nucleus in circular path. So centrifugal force is given by

$F = \frac{mv^2}{r}$ \longrightarrow Eq(1)

Coulomb's force of attraction between electron and proton is given by

$$F = \frac{Kq_1q_2}{r^2}$$

Where $r_1 = ze$ and $q_2 = e^-$ $K = \frac{1}{4\pi\epsilon_0}$

ϵ_0 is the permittivity constant of the vacuum

$$\epsilon_0 = 8.85 \times 10^{-12} \text{ C}^2 \text{ N}^{-1} \text{ m}^{-2}$$

Put in above eq

$$F = \frac{Zee}{4\pi\epsilon_0 r^2}$$

$$F = \frac{Ze^2}{4\pi\epsilon_0 r^2} \longrightarrow \text{Eq(2)}$$

Where Z is the atomic number

These two forces are equal. So by comparing Eq(1) and Eq(2)

$$\frac{mv^2}{r} = \frac{Ze^2}{4\pi\epsilon_0 r^2}$$

$$V^2 = \frac{Ze^2}{4\pi\epsilon_0 r m} \longrightarrow \text{Eq(3)}$$

From Bohr's postulate angular momentum is given by

$$mvr = \frac{nh}{2\pi}$$

Where n is the principal quantum number

$$n = 1, 2, 3, \dots$$

Shell K L M

h = plank's constant

$$h = 6.625 \times 10^{-34}$$

m is the mass of electron

v is the velocity of electron

r is the radius

$$v = \frac{nh}{2\pi mr}$$

Squaring both sides

$$v^2 = \frac{n^2 h^2}{4\pi^2 m^2 r^2} \longrightarrow \text{Eq(4)}$$

By comparing Eq(3) and Eq(4)

$$\frac{ze^2}{4\pi\epsilon_0 r m} = \frac{n^2 h^2}{4\pi^2 m^2 r^2}$$

$$\frac{ze^2}{\epsilon_0} = \frac{n^2 h^2}{\pi m r}$$

$$r = \frac{n^2 h^2 \epsilon_0}{\pi m z e^2}$$

$$r = \frac{h^2 \epsilon_0}{\pi m z e^2} \times \frac{n^2}{z} \longrightarrow \text{Eq(5)}$$

$$\text{Let } a^\circ = \frac{h^2 \epsilon_0}{\pi m e^2}$$

$$a^\circ = \frac{(6.625 \times 10^{-34})^2 (8.85 \times 10^{-12})}{3.14 \times 9.1 \times 10^{-31} \times (1.6 \times 10^{-19})^2}$$

$$a^\circ = 0.529 \times 10^{-10}$$

$$a^\circ = 0.529 \text{ \AA}$$

Put in Eq(5)

$$r = a^\circ \times \frac{n^2}{z}$$

$$r = 0.529 \text{ \AA} \times \frac{n^2}{z}$$

For hydrogen $z = 1$

$$r = 0.529 \text{ \AA} \times n^2$$

(b) Ammonia Solvay process is used to manufacture sodium carbonate. During this process ammonia is recovered by the following reaction.



When 100 g of ammonium chloride and 150 g calcium hydroxide are used then

(At. Mass N=14 H=1 Cl= 35.5 Ca=40)

- i. Calculate the mass in kg of ammonia produce during chemical reaction.
- ii. Calculate the excess mass in gram of one of the reactant left unreacted.

Ans:

$$\text{Mass of NH}_4\text{Cl} = 100\text{g}$$

$$\text{Molar mass of NH}_4\text{Cl} = 14+1\times 4+35.5$$

$$\text{Molar mass of NH}_4\text{Cl} = 53.5\text{g/mol}$$

$$\text{Molar of NH}_4\text{Cl} = \frac{\text{Mass in gram}}{\text{Molar mass}}$$

$$\text{Molar of NH}_4\text{Cl} = \frac{100}{53.5}$$

$$\text{Molar of NH}_4\text{Cl} = 1.87 \text{ mole of NH}_4\text{Cl}$$

From equation

$$2 \text{ moles of NH}_4\text{Cl} = 2 \text{ moles of NH}_3$$

$$1.87 \text{ moles of NH}_4\text{Cl} = x$$

$$= \frac{2}{2} \times 1.87$$

$$= 1.87 \text{ moles of NH}_3$$

$$\text{Mass of Ca(OH)}_2 = 150\text{g}$$

$$\text{Molar mass of Ca(OH)}_2 = 40+16\times 2+1\times 2$$

$$\text{Molar mass of Ca(OH)}_2 = 74 \text{ g/mol}$$

$$\text{Molar of Ca(OH)}_2 = \frac{\text{Mass in gram}}{\text{Molar mass}}$$

$$\text{Molar of Ca(OH)}_2 = \frac{150}{74}$$

$$\text{Molar of Ca(OH)}_2 = 2.03 \text{ moles of Ca(OH)}_2$$

From equation

$$1 \text{ mole of Ca(OH)}_2 = 2 \text{ moles of NH}_3$$

$$2.03 \text{ moles of Ca(OH)}_2 = x$$

$$x = 2 \times 2.03$$

$$x = 4.06 \text{ moles of NH}_3$$

Since NH₄Cl produces the least amount of NH₃. So NH₄Cl is the limiting reactant.

$$\text{Mass of NH}_3 = \text{mole} \times \text{molar mass of NH}_3$$

$$\text{Mass of NH}_3 = 1.87 \times 17$$

$$\text{Mass of NH}_3 = 31.97 \text{ g NH}_3$$

$$\text{Mass of NH}_3 = \frac{31.97}{1000}$$

$$\text{Mass of NH}_3 = 0.03197 \text{ Kg of NH}_3$$

(ii) From equation

$$2 \text{ moles of NH}_4\text{Cl} = 1 \text{ mole of Ca(OH)}_2$$

1.87 moles of $\text{NH}_4\text{Cl} = x$

$$x = \frac{1.87 \times 1}{2}$$

$x = 0.935$ moles of Ca(OH)_2 used

Ca(OH)_2 left = $2.03 - 0.935$

$\text{Ca(OH)}_2 = 1.095$ moles of Ca(OH)_2 left

Mass of Ca(OH)_2 left = mole \times molar mass

Mass of Ca(OH)_2 left = 1.095×74

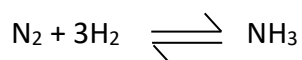
Mass of Ca(OH)_2 left = $80.905 \text{ g Ca(OH)}_2$ left

Q. No. 4 Consider the following reaction:



(a) Derive expression of K_c for the above reaction and calculate equilibrium concentration of N_2 . The equilibrium concentration of H_2 and NH_3 are 1.0 mol dm^{-3} and 0.5 mol dm^{-3} respectively. K_c of above reaction at 25°C is 1.85×10^3 .

Ans:



At $t = 0$

$a/v \text{ mol/dm}^3$ $b/v \text{ mol/dm}^3$

$$\frac{a-x}{v} \quad \frac{b-3x}{v} \quad \frac{2x}{v}$$

K_c is written as

$$K_c = \frac{[\text{NH}_3]^2}{[\text{N}_2][\text{H}_2]^3}$$

By putting respective values.

$$K_c = \frac{\left[\frac{2x}{v}\right]^2}{\left[\frac{a-x}{v}\right]\left[\frac{b-3x}{v}\right]^3}$$

$$K_c = \frac{4x^2}{(a-x)\frac{(b-3x)^3}{v^4}}$$

$$K_c = \frac{4x^2v^2}{(a-x)(b-3x)^3}$$

$$K_c = 1.85 \times 10^3 \quad V = 1 \text{ dm}^3$$

Equilibrium concentration

$$[\text{H}_2] = 1.0 \text{ mole/dm}^3$$

$$[\text{NH}_3] = 0.5 \text{ mole/dm}^3$$

$$[\text{NH}_3] = 2x = 0.5$$

$$x = \frac{0.5}{2}$$

$$x = 0.25 \text{ mole/dm}^3$$

$$[\text{N}_2] = a - x$$

$$K_c = \frac{4x^2v^2}{(a-x)(b-3x)^3}$$


$$1.85 \times 10^3 = \frac{4(0.25)^2 \times 1}{(a-x) \times (1)^3}$$

$$(a - x) = [\text{N}_2] = \frac{4(0.25)^2}{1.85 \times 10^3}$$

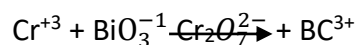
$$[\text{N}_2] = 1.35 \times 10^{-4} \text{ mole/dm}^3$$

Equilibrium concentration of N_2

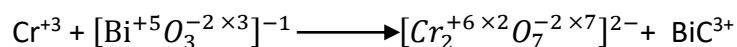
Q. No. 4 (b) Balance the following chemical equation in an acidic medium



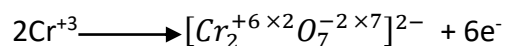
Ans:



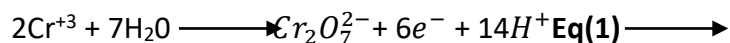
Step 1 write Oxidation number



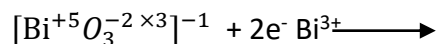
Steps 2 write half oxidation reaction. Balance e^-



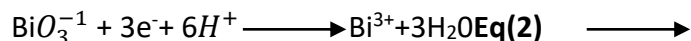
Step 3 Balance oxygen by adding $7\text{H}_2\text{O}$ on LHS




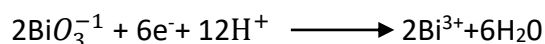
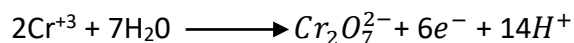
Steps 4 write half reduction reaction. Balance the e^-



Step 5 Balance oxygen by adding $3\text{H}_2\text{O}$ on RHS



Step 6 Balance the electrons by Xing Eq(2) by '2' and then add in Eq (1)



Balanced equation.

Q. No. 5 (a) Phosgene (COCl_2) is a toxic gas. This gas is prepared by the reaction of carbon monoxide with chlorine.



The following data were obtained for kinetic study of this reaction.

Experiment	Initial [CO]	Initial [Cl ₂]	Initial rate (moles dm ⁻³ s ⁻¹)
1	1.000	0.100	1.29 × 10 ⁻²⁹
2	0.100	0.100	1.30 × 10 ⁻³⁰
3	0.100	1.000	1.30 × 10 ⁻³⁰

Use the data in the table to deduce the order of the reaction with respect to CO and Cl₂. Hence write a rate law/equation for this reaction.

Ans:

Exp	Initial conc [CO]	Initial con [Cl ₂]	Initial rate
1	1.0	0.1	1.29 × 10 ⁻²⁹
2	0.1	0.1	1.30 × 10 ⁻³⁰
3	0.1	1.0	1.31 × 10 ⁻³⁰

In experiment 1 and conc of Cl_2 is constant and conc of CO vary. Ratio of conc is

Exp. 1 : Exp. 2

$$\frac{1.0}{0.1} \quad \frac{0.1}{0.1}$$

$$10 : 1$$

10 : 1

Ratio of rate of reaction is exp 1 and 2

Exp. 1 : Exp. 2

$$\frac{1.29 \times 10^{-29}}{1.30 \times 10^{-30}} \quad \frac{1.30 \times 10^{-30}}{1.30 \times 10^{-30}}$$

$$1.30 \times 10^{-30} \quad 1.30 \times 10^{-30}$$

10 : 1

Hence it is 1st order W.r.t $[\text{CO}]$

$$\text{Rate} = k [\text{CO}]^1$$

1st order W.r.t CO

Conc of CO in experiment 2 and 3 is constant but conc of Cl_2 vary. Conc ratio is

Exp. 2 : Exp. 3

$$\frac{0.1}{0.1} \quad \frac{1.0}{0.1}$$

$$1 : 10$$

1 : 10

Rate ratio of Exp 2 and 3

Exp. 2 : Exp. 3

$$\frac{1.3 \times 10^{-30}}{1.3 \times 10^{-30}} \quad \frac{1.3 \times 10^{-30}}{1.3 \times 10^{-30}}$$

$$1.3 \times 10^{-30} \quad 1.3 \times 10^{-30}$$

1 : 1

As the conc is increased to 10 times but rate is constant. So Cl_2 is zero order W.r.t Cl_2

$$\text{Rate} = k[\text{Cl}_2]^0$$

Zero order of reaction W.r.t Cl_2

Overall rate Law

$$\text{Rate} = k[\text{CO}]^1[\text{Cl}_2]^0$$

Overall order of reaction = 1 + 0

Overall order of reaction = 1st order

(B) Show the diamagnetic/paramagnetic nature of O_2 , O_2^{2+} and O_2^{2-} with the help of molecular orbital theory.

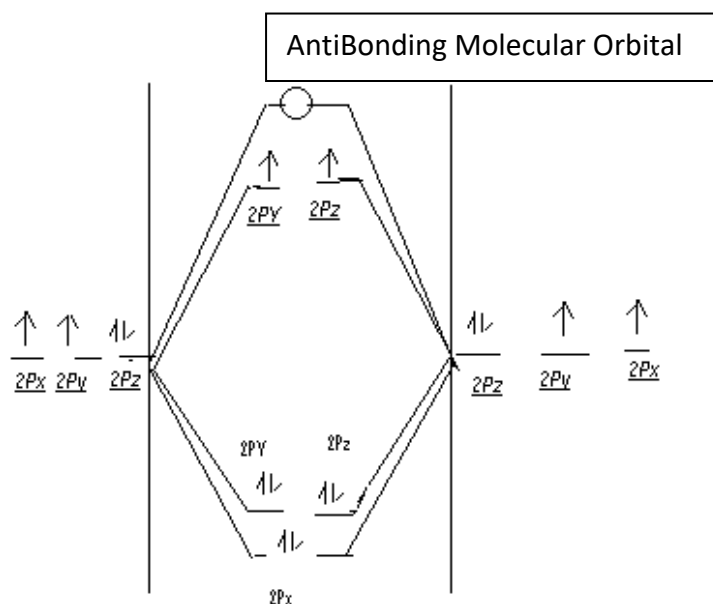
Ans:

O_2

$8\text{O} \quad 1s^2, 2s^2, 2p^4 \quad \text{Valence Shell}$



2s 2px 2py 2pz



Paramagnetic behaviour:

There are two unpaired electrons in antibonding. So oxygen shows paramagnetic behaviour i.e. attracted towards magnet.

