

**Tuesday 4 June 2013 – Afternoon**

**AS GCE CHEMISTRY A**

**F322/01** Chains, Energy and Resources

Candidates answer on the Question Paper.

**OCR supplied materials:**

- *Data Sheet for Chemistry A* (inserted)

**Other materials required:**

- Scientific calculator

**Duration:** 1 hour 45 minutes




Candidate forename		Candidate surname	
-----------------------	--	----------------------	--

Centre number						Candidate number				
---------------	--	--	--	--	--	------------------	--	--	--	--

**INSTRUCTIONS TO CANDIDATES**

- The Insert will be found in the centre of this document.
- Write your name, centre number and candidate number in the boxes above. Please write clearly and in capital letters.
- Use black ink. HB pencil may be used for graphs and diagrams only.
- Answer **all** the questions.
- Read each question carefully. Make sure you know what you have to do before starting your answer.
- Write your answer to each question in the space provided. If additional space is required, you should use the lined page at the end of this booklet. The question number(s) must be clearly shown.
- Do **not** write in the bar codes.

**INFORMATION FOR CANDIDATES**

- The number of marks is given in brackets [ ] at the end of each question or part question.
-  Where you see this icon you will be awarded marks for the quality of written communication in your answer.

This means for example you should:

- ensure that text is legible and that spelling, punctuation and grammar are accurate so that meaning is clear;
- organise information clearly and coherently, using specialist vocabulary when appropriate.
- You may use a scientific calculator.
- A copy of the *Data Sheet for Chemistry A* is provided as an insert with this question paper.
- You are advised to show all the steps in any calculations.
- The total number of marks for this paper is **100**.
- This document consists of **24** pages. Any blank pages are indicated.



Answer **all** the questions.

- 1 Crude oil is a complex mixture of many hydrocarbons.

Crude oil is processed by the petroleum industry to make fuels and petrochemicals.

- (a) The straight-chain alkane, **A**, is present in crude oil.  
**A** has molecules with ten carbon atoms.

- (i) What is the molecular formula of **A**?

..... [1]

- (ii) **B** is a branched-chain isomer of **A**.

Draw the skeletal formula of a possible structure for **B**.

Name your structure.

name ..... [2]

- (iii) The branched-chain isomer **B** has a lower boiling point than the straight chain alkane **A**.

Explain why.

.....  
 .....  
 .....  
 ..... [2]

- (b) A chemist heats a pure sample of  $C_{15}H_{32}$  in the presence of a catalyst.

A reaction called cracking happens.

- (i) Construct an equation to show the cracking of  $C_{15}H_{32}$ .

..... [1]

- (ii) When cracking takes place, a large number of products are formed.

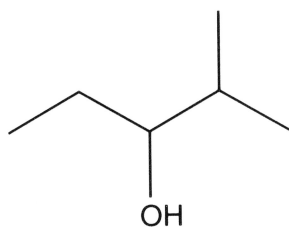
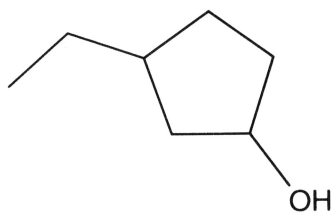
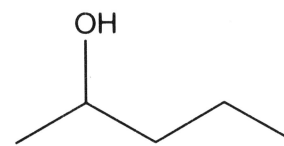
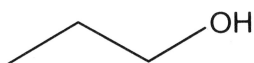
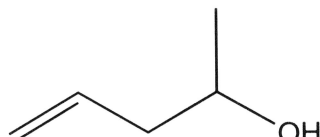
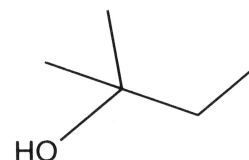
Suggest why a large number of products are formed.

.....  
 .....  
 ..... [1]





2 The skeletal formulae of six alcohols, **C**, **D**, **E**, **F**, **G** and **H**, are shown below.

**C****D****E****F****G****H**

(a) (i) Which **two** alcohols are structural isomers of one another?

.....

[1]

(ii) Which alcohol is a tertiary alcohol?

.....

[1]

(iii) Which alcohol can be oxidised to a carboxylic acid using acidified  $K_2Cr_2O_7$ ?

.....

[1]

(b) (i) What is the molecular formula of alcohol **G**?

..... [1]

(ii) What is the name of alcohol **C**?

..... [1]

(c) The alcohols are members of a homologous series.

Explain the term *homologous series*.

.....

.....

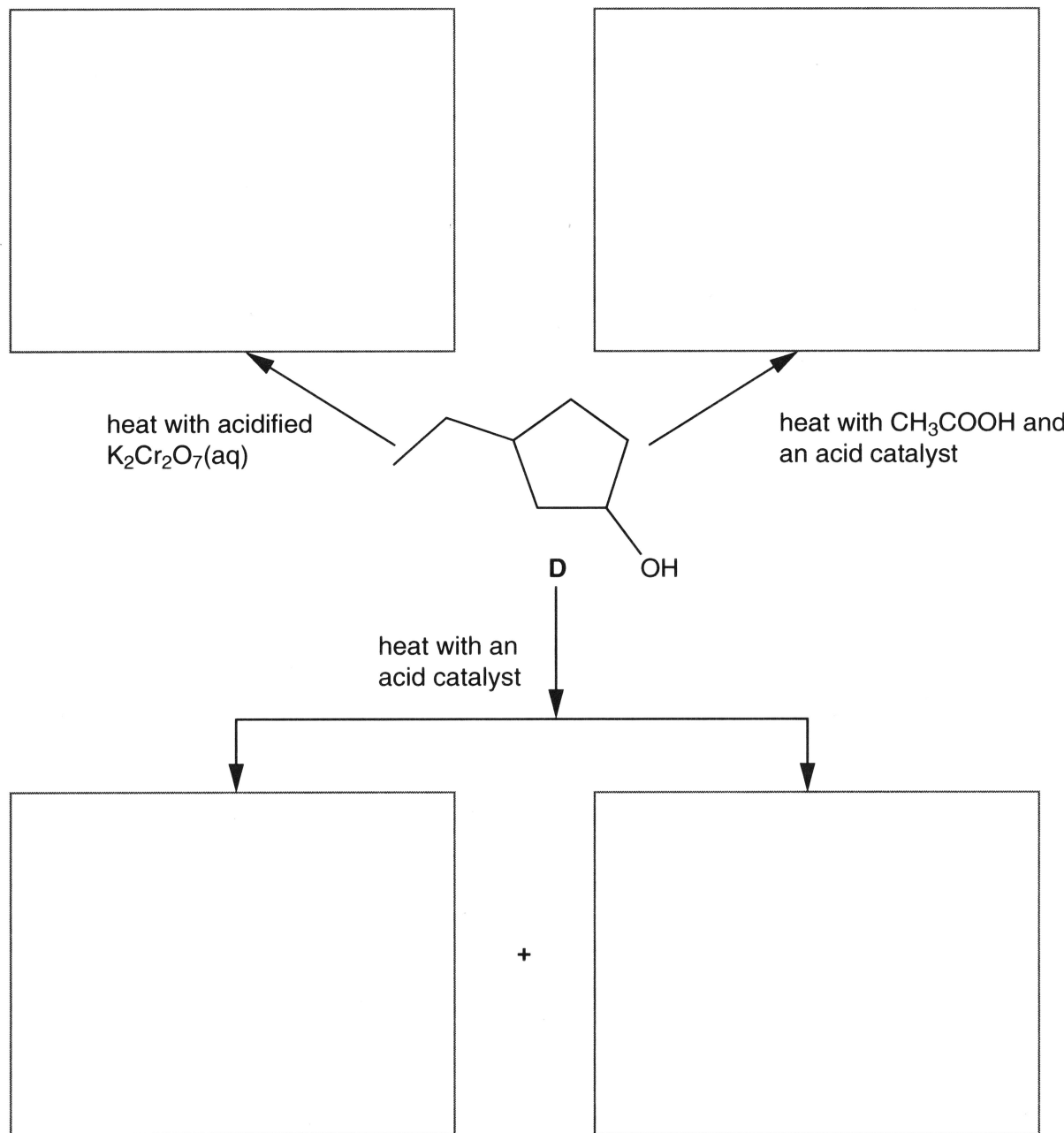
.....

..... [2]



(d) Alcohol **D** is reacted with three different reagents.

Complete the flowchart below to show the organic product(s) formed in each of the reactions of alcohol **D**.

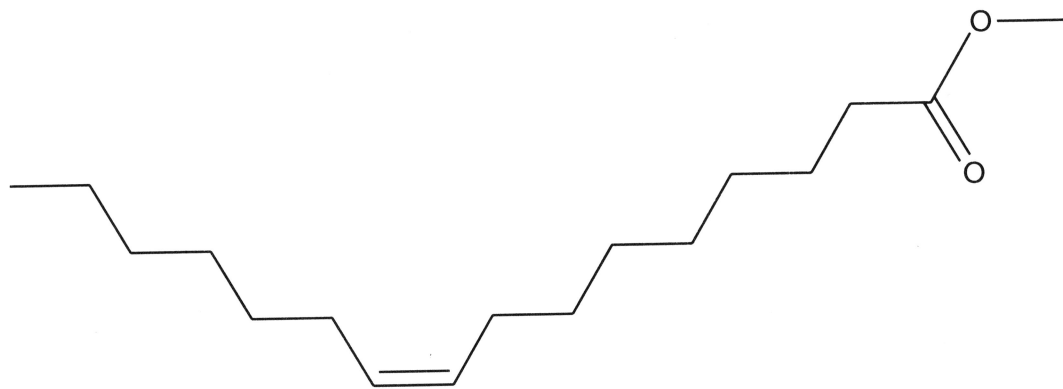


[4]

[Total: 11]



- 3 Compound **I** is found in biodiesel. It has the skeletal formula shown below.



- (a) Name the **two** functional groups that are present in a molecule of **I**.

.....  
 ..... [2]

- (b) Why is compound **I** unsaturated?

.....  
 ..... [1]

- (c) A sample of compound **I** is shaken with aqueous bromine.

What colour change would you see?

from ..... to ..... [1]

- (d) Compound **J** is a stereoisomer of compound **I**.

- (i) What is meant by the term *stereoisomers*?

.....  
 .....  
 ..... [1]

- (ii) Draw or describe how the structure of **J** differs from that of **I**.

.....  
 .....  
 ..... [1]



(e) A student determined the enthalpy change of combustion for compound I.

In her experiment, 1.34 g of compound I was used to heat 50.0 g of water.

The temperature of the water changed from 20.2 °C to 54.0 °C.

(i) What is meant by the term *enthalpy change of combustion*,  $\Delta H_c$ ?

.....  
 .....  
 ..... [2]

(ii) Calculate the energy released, in kJ, in the student's experiment.

The specific heat capacity of water is 4.18 Jg<sup>-1</sup> K<sup>-1</sup>.

energy = ..... kJ [2]

(iii) The molecular formula of compound I is C<sub>17</sub>H<sub>32</sub>O<sub>2</sub>.

Calculate the amount, in moles, of compound I used by the student.

amount = ..... mol [2]

(iv) Calculate the enthalpy change of combustion of compound I.

$\Delta H_c$  = ..... kJ mol<sup>-1</sup> [3]



- (v) The student noticed that compound I burnt with a yellow flame and produced black smoke.

Suggest an explanation for these observations.

.....  
.....  
..... [1]

- (f) Some scientists believe that we should use more biofuels such as biodiesel and bioethanol.

Bioethanol is made by the fermentation of plant sugars such as glucose.

Write the equation for the fermentation of glucose to make ethanol and state **two** essential conditions for this fermentation.

equation

.....

essential conditions

.....

..... [3]

[Total: 19]






- 4 Iodine monobromide, IBr, has a permanent dipole.

Alkenes react with IBr in a similar way to the reactions of alkenes with HBr.

- (a) Propene reacts with IBr to make two possible organic products.

One of these products is 2-bromo-1-iodopropane.

- (i) Using the curly arrow model, complete the mechanism to make 2-bromo-1-iodopropane.



[3]

- (ii) What is the name of this mechanism?

..... [1]

- (iii) Draw the structure of the other possible organic product of the reaction of propene with IBr.

[1]

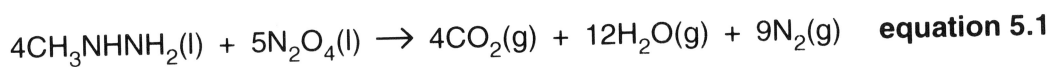






5 Nitrogen forms several oxides including  $N_2O_4$ ,  $N_2O$  and  $NO$ .

- (a) A rocket uses the reaction between  $N_2O_4$  and methylhydrazine,  $CH_3NHNH_2$ , **equation 5.1**, to release a large amount of energy.



Some enthalpy changes of formation,  $\Delta H_f$ , are shown in the table.


Substance	$\Delta H_f / \text{kJ mol}^{-1}$
$CH_3NHNH_2(l)$	+54
$N_2O_4(l)$	-20
$CO_2(g)$	-394
$H_2O(g)$	-242

Using the enthalpy changes of formation,  $\Delta H_f$ , calculate the enthalpy change of reaction in **equation 5.1**.

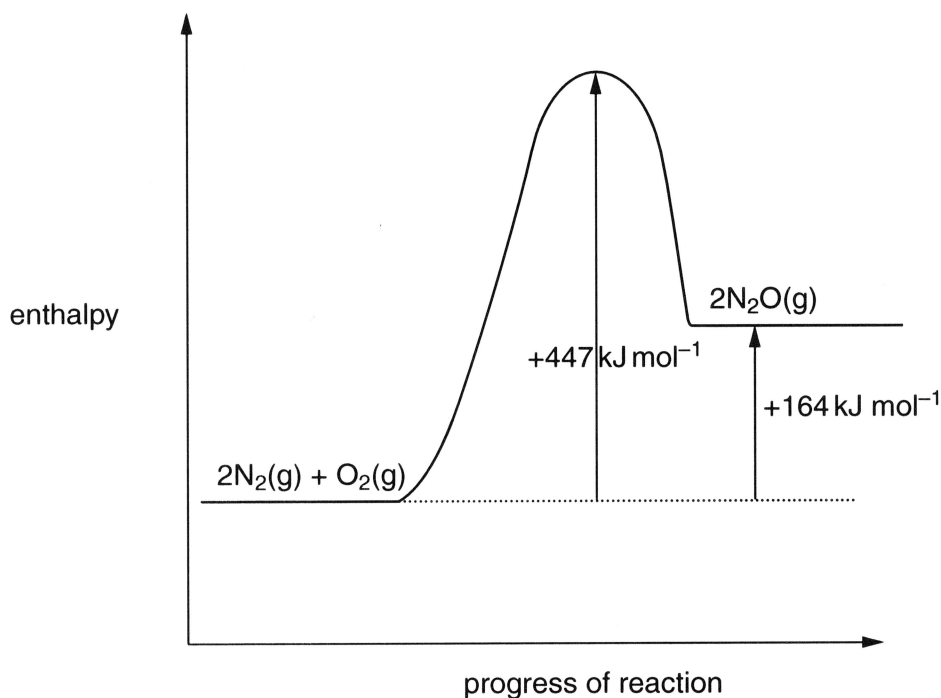
enthalpy change of reaction = .....  $\text{kJ mol}^{-1}$  [3]



- (b) Under certain conditions nitrogen reacts with oxygen to make  $\text{N}_2\text{O}$ .



The enthalpy profile diagram for this reaction is shown in **Fig. 5.3**.



**Fig. 5.3**

- (i) Calculate the enthalpy change when  $240 \text{ dm}^3$  of  $\text{N}_2\text{O}(\text{g})$ , measured at room temperature and pressure, is formed from  $\text{N}_2$  and  $\text{O}_2$ .

enthalpy change = ..... kJ [2]

- (ii) What is the enthalpy change of formation,  $\Delta H_f$ , of  $\text{N}_2\text{O}(\text{g})$ ?

$\Delta H_f = \dots\dots\dots \text{kJ mol}^{-1}$  [1]



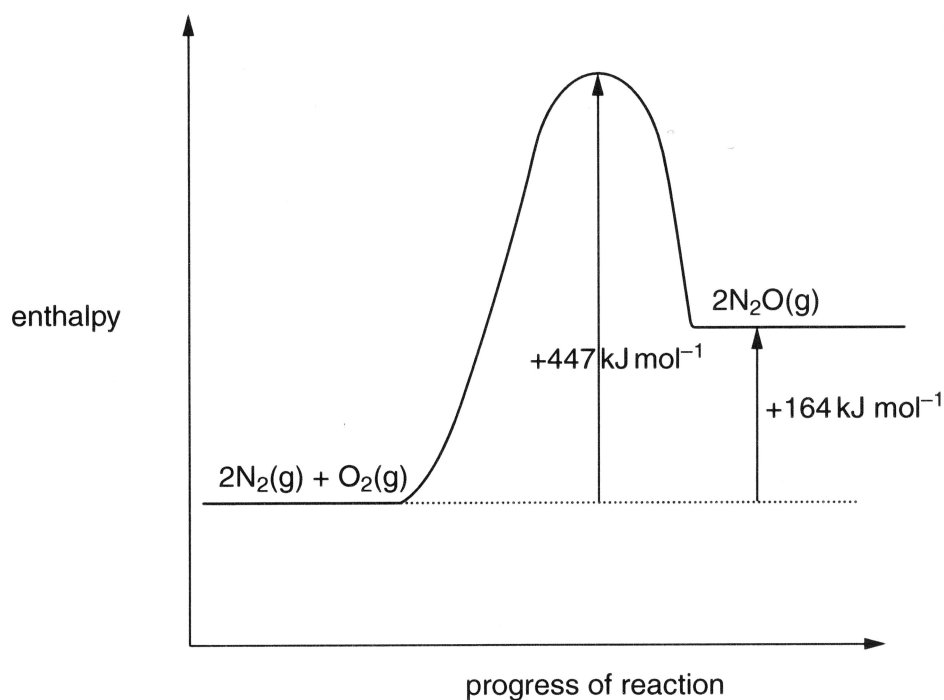


Fig. 5.3 (repeated)

- (iii) The reaction in **equation 5.2** is reversible.



Calculate the activation energy,  $E_a$ , for the reverse reaction.

$$E_a \text{ (reverse reaction)} = \dots\dots\dots \text{ kJ mol}^{-1} \quad [1]$$

- (c) Describe and explain, using equations, how the concentration of ozone in the stratosphere is maintained.

.....  
 .....  
 .....  
 ..... [2]

- (d) In the stratosphere, NO catalyses the breakdown of ozone.

Write **two** equations to show how NO catalyses this breakdown.

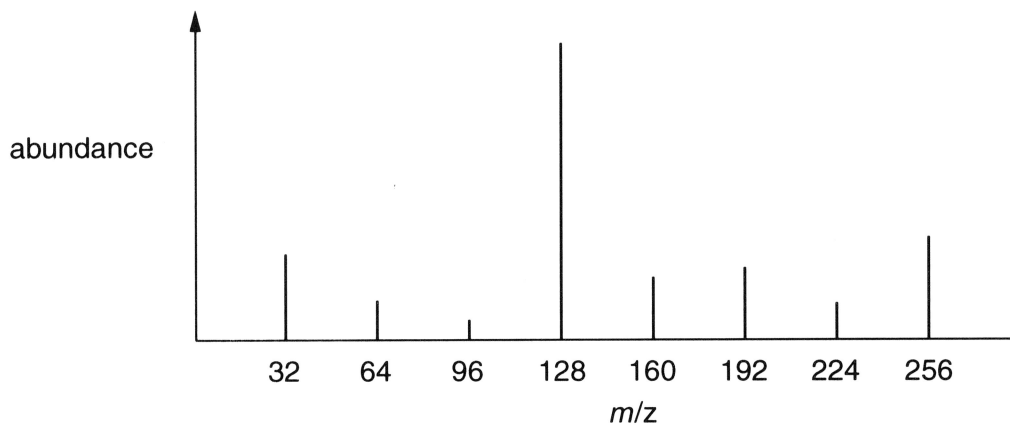
.....  
 ..... [2]



6 Mass spectrometry and infrared spectroscopy are used in analysis.

(a) The element sulfur exists as molecules,  $S_n$ .

The mass spectrum that would be given by a sample of sulfur is shown below.  
All the sulfur atoms are the same isotope.



(i) State the  $m/z$  value of the molecular ion.

..... [1]

(ii) Suggest the formula for a molecule of sulfur.

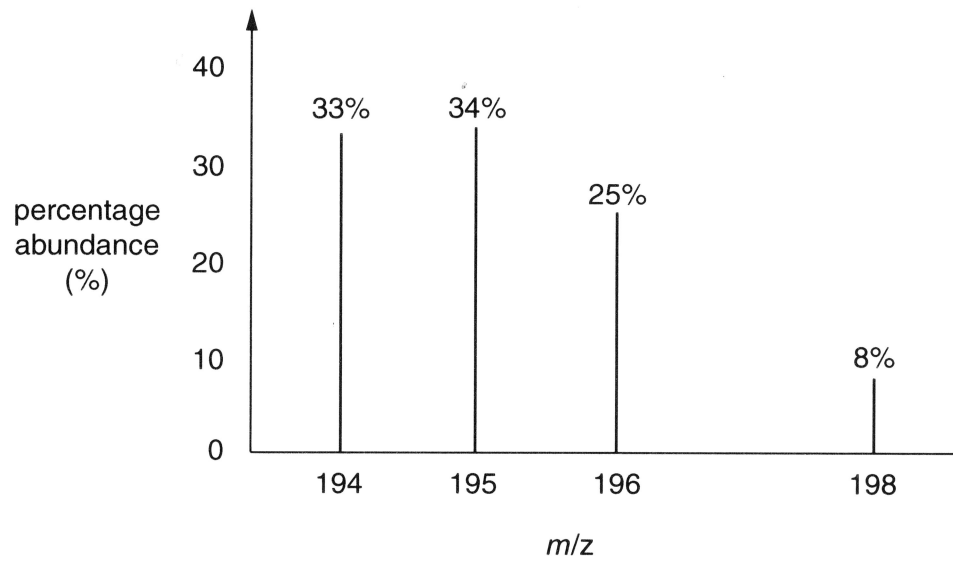
..... [1]

(iii) What is the formula for the fragment ion with  $m/z = 128$ ?

..... [1]



- (b) A sample of an element, **L** is analysed using mass spectrometry. The mass spectrum is shown below.



Calculate the relative atomic mass of **L**.  
Give your answer to **one** decimal place.

relative atomic mass of **L** = ..... [2]

- (c) Give an everyday use for infrared spectroscopy.

.....  
..... [1]







7 The list shows the structural formulae of some halogenoalkanes.

<b>N</b>	$\text{CF}_3\text{CFCI}_2$	<b>R</b>	$\text{CH}_3\text{CH}_2\text{CHClCH}_3$
<b>O</b>	$\text{CH}_3\text{CH}_2\text{Br}$	<b>S</b>	$\text{CH}_3\text{CHBrCH}_2\text{CHICH}_3$
<b>P</b>	$\text{CH}_3\text{CH}_2\text{CH}_2\text{CH}_2\text{Br}$	<b>T</b>	$(\text{CH}_3)_3\text{CBr}$
<b>Q</b>	$\text{CH}_3\text{CH}_2\text{CH}_2\text{CH}_2\text{I}$		

(a) Choose from the list above, the **letter** of the halogenoalkane that is extremely unreactive.

.....

[1]

(b) Halogenoalkanes react with hot  $\text{KOH}(\text{aq})$  to make alcohols.

(i) Choose from the list above, the **letter** of the halogenoalkane which reacts with hot  $\text{KOH}(\text{aq})$  to form a diol (a molecule with two  $\text{OH}$  groups).

.....

[1]

(ii) Using the curly arrow model, describe the mechanism of the reaction between  $\text{CH}_3\text{CH}_2\text{CH}_2\text{CH}_2\text{Br}$  and hot  $\text{KOH}(\text{aq})$  to make an alcohol.

Include relevant dipoles and the name of the mechanism.

name of mechanism ..... [4]

(iii) Why is the reaction of **P** with hot  $\text{KOH}(\text{aq})$  slower than the reaction of **Q** with hot  $\text{KOH}(\text{aq})$ ?

.....  
 .....  
 ..... [1]



- (c) Write one equation, using structural formulae, to show how but-2-ene can be converted into one of the listed halogenoalkanes, N, O, P, Q, R, S or T.

[2]

- (d) CFCs were once used as propellants but have now been replaced by biodegradable alternatives.

State **one** type of a biodegradable alternative.

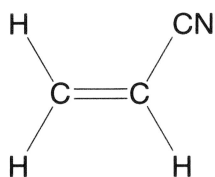
..... [1]

[Total: 10]



- 8 Poly(propenenitrile) is used to make acrylic fibres for clothing.

Poly(propenenitrile) is a polymer manufactured from propenenitrile.



**propenenitrile**

- (a) Draw a section showing **two** repeat units of poly(propenenitrile).

[1]

- (b) Explain why this manufacture of poly(propenenitrile) has a 100% atom economy.

.....

..... [1]





(d) A factory is able to make 11.13 kg of propenenitrile from 220 mol of propene.

Calculate the percentage yield of the reaction to form propenenitrile from propene.

percentage yield = ..... % [2]

(e) The chemical industry uses temperature and catalysts to control the rate of reactions.

Using Boltzmann distribution diagrams, explain the effect on the rate of a reaction of:

- increasing the temperature
- adding a catalyst.

.....

.....

.....

.....

.....

.....

.....

.....

.....

.....

.....

.....

.....

.....

.....

.....

.....

.....

.....

.....

.....

.....

.....





**ADDITIONAL ANSWER SPACE**

If additional space is required, you should use the following lined page. The question number(s) must be clearly shown in the margin.

Lined area for writing answers, consisting of a vertical margin line on the left and horizontal dotted lines for writing.



**Copyright Information**

OCR is committed to seeking permission to reproduce all third-party content that it uses in its assessment materials. OCR has attempted to identify and contact all copyright holders whose work is used in this paper. To avoid the issue of disclosure of answer-related information to candidates, all copyright acknowledgements are reproduced in the OCR Copyright Acknowledgements Booklet. This is produced for each series of examinations and is freely available to download from our public website ([www.ocr.org.uk](http://www.ocr.org.uk)) after the live examination series.

If OCR has unwittingly failed to correctly acknowledge or clear any third-party content in this assessment material, OCR will be happy to correct its mistake at the earliest possible opportunity.

For queries or further information please contact the Copyright Team, First Floor, 9 Hills Road, Cambridge CB2 1GE.

OCR is part of the Cambridge Assessment Group: Cambridge Assessment is the brand name of University of Cambridge Local Examinations Syndicate (UCLES), which is itself a department of the University of Cambridge.



DO NOT WRITE IN THIS MARGIN